

Homework - Year 2

Maths

Given: 02.03.26

Due: 09.03.26



This week's learning:

Arithmetic:

$6 + 6 =$

$14 + 5 =$

$9 - 7 =$

$2 + 11 =$


$2 + 15 =$

$7 - 3 =$

$10 + 10 =$

$8 - 2 =$

- 3 Write two additions and two multiplications for the array.



$\square + \square + \square = \square$


$\square \times \square = \square$

$\square + \square + \square + \square = \square$

$\square \times \square = \square$

What do you notice?

- 4 Write two multiplications for the array.

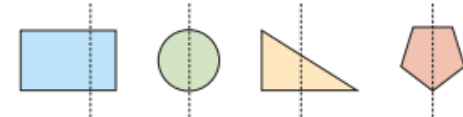


$\square \times \square = \square$

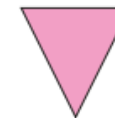
$\square \times \square = \square$

Practise makes perfect:

- 3 Tick the shapes that show a correct line of symmetry.



- 4 Complete the sentences.



This is a triangle.

It has sides.

It has 3 vertices.

- 6 Jo has a 3-D shape.
She counts the 2-D faces.



There are
4 rectangles and
2 squares.

What is Jo's shape?

Homework - Year 2

English

Given: 02.03.26

Due: 09.03.26



SPAG:

1. Which word completes the sentence?

We _____ our bikes.

Choose one:

- a) rided
- b) rides
- c) riding
- d) rode



The Scientist

When the scientist walked into the room, she stood tall. She wore a clean, white coat and had a name tag on her chest. Her hair was pulled back into a tight bun and there was a yellow pencil to hold it in place. She had swapped the plastic box of science tools that she normally carried for a large, red basket. The corners of her mouth moved upward when she saw me trying to peek inside. Her big, green eyes looked into mine and she raised her narrow eyebrows. "Good, I'm so glad you're here," she said quietly.



1. What colour is the scientist's coat?
Tick one.

- red
- white
- yellow

2. Find and copy the word which means the same as 'thin'.

3. Fill in the missing word.
She had swapped the plastic box
of _____ tools that she
normally carried for a large, red basket.

4. How does the scientist feel about the contents of the basket? How do you know?

