

# Homework - Year 2A

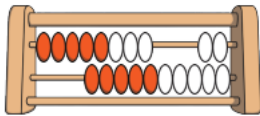
Given: 02.03.26

Due: 09.03.26



Maths Name: \_\_\_\_\_


## Arithmetic:



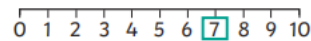
$$8 + \square = 9$$



$$5 = \square - 1$$




$$10 = \square + 1$$



$$\square - 1 = 7$$

## This week's learning:

- 3 Write two additions and two multiplications for the array.



$$\square + \square + \square = \square$$


$$\square \times \square = \square$$

$$\square + \square + \square + \square = \square$$

$$\square \times \square = \square$$

What do you notice?

- 4 Write two multiplications for the array.



$$\square \times \square = \square$$

$$\square \times \square = \square$$

# Homework - Year 2A


Given: 02.09.26

Due: 09.03.26

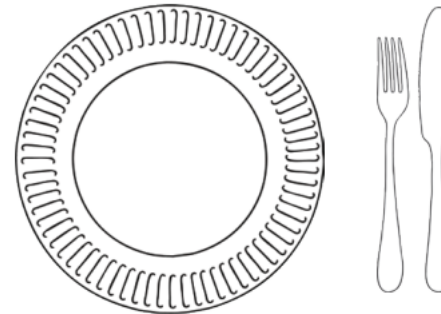


English Name: \_\_\_\_\_

The dog had a bone to chew on.



I had tomatoes and potatoes for my tea.



The brown acorn fell from the big oak tree.



The bear had a red paw.

