

Homework - Year 2

Maths

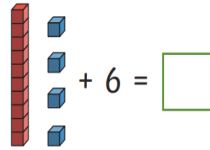
Given: 24.11.25

Due: 01.12.25

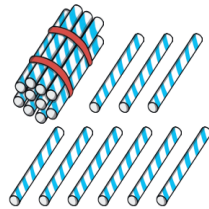


Arithmetic:

$100 - 70 = \square$



$5 + 12 = \square$



$13 = 19 - \square$

This week's learning:

▶ $53 + 19$ ○ $53 + 25$

▶ $27 + 31$ ○ $42 + 27$

▶ $56 - 43$ ○ $56 - 43$

▶ $35 + 12$ ○ $27 + 25$

▶ $27 + 25$ ○ $35 + 12$

▶ $41 - 18$ ○ $35 + 12$

Practise makes perfect:

Section 1

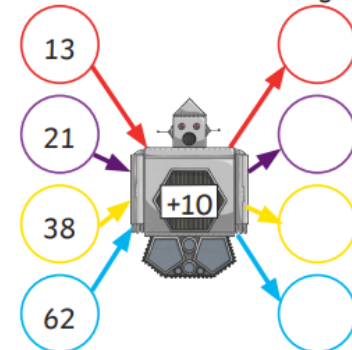
Count back in 5s from this number:

40, , , , , ,



Section 6

Work these out mentally:



Homework - Year 2

English

Given: 24.11.25

Due: 01.12.25



SPAG:

List **THREE** adjectives to describe what you see in this picture. **d**



Use either ? . or ! for a question, statement or an exclamation sentence. Add the correct punctuation to the sentences below. **a**



Which animals are at the farm

I like the horses

What a fun place to be

Diary of a Mermaid

5 Dear Diary

Friday 12th June

18 Today was the first day of summer. I woke up early to see
27 the bright, beautiful sunshine. Mother asked me to visit
40 my grandma on the other side of the bay. I set off and
49 swam very quietly past the creepy shipwreck where the
59 grumpy, old shark lives. I didn't want to wake him
70 because I have heard that he is very snappy! I also
79 collected some beautiful shells to cheer up Grandma. I
88 arrived at Grandma's. She looked very poorly but the
99 shells cheered her up. I sang a happy tune that Grandma
108 had taught me on the way home. Unfortunately, I
116 forgot to swim quietly past the spooky shipwreck...



Questions



1. Who did the mermaid go to visit?



2. Find and copy the expanded noun phrase used to describe the sunshine.



Explain why the mermaid swam quietly past the creepy shipwreck.



What do you think might happen next?

Our Reading Comprehension Skills: Explain Retrieve Inference Choice

