

Homework - Year 2


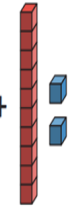
Given: 20.10.25

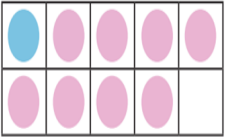
Due: 03.11.25



Maths Name: _____

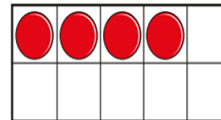
Arithmetic:

 $- 1 = \square$	$12 = \square +$ 
--	--

 $\square + \square = 9$	$14 - 10 = \square$
---	---------------------

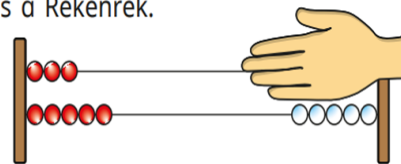
This week's learning:

Mo puts some counters on a ten frame.



How many more counters does he need to fill the ten frame?

Here is a Rekenrek.



How many beads is the hand covering?

Practise makes perfect:

Count in 3's.

3 6 9 ___ 15 ___
24 21 ___ 15 ___ 9
___ 24 27 30 ___ 36
45 ___ ___ 36 33 30
12 ___ 18 21 ___ 27

___ 48 45 ___ 39 36
39 42 ___ 48 ___ 54
21 ___ ___ 12 9 6
___ ___ 21 24 27 30
54 51 ___ ___ 42 39

Homework - Year 2

Given: 20.10.25

Due: 03.11.25



English Name: _____

SPAG:

Write a sentence to go with this picture. Can you include an expanded noun phrase?

(hint adjective, adjective noun
E.G. A spider has spun a delicate, glittering web between two branches.)



What Plants Need to Grow



Questions

What Does a Plant Need to Help It Grow?

- air
- light
- water
- nutrients
- warmth

Why Does It Need Them?

- If a seed is not warm enough, it will not germinate. **Germination is when the seed starts to sprout.**
- If a plant does not have enough light, it will grow to be tall and flimsy as it tries to search for light.
- If a plant is not watered enough, its stem will be fragile and it will have very dry leaves.



If a plant does not get all of these things it will most likely not survive.

1. Find and copy the word that means the same as 'delicate'.

2. What is germination?

3. What do you think would happen if you planted a seed and put it into a cold, dark cupboard?

4. Where would be the best place to grow a plant?

Our Reading Comprehension Skills: Explain Retrieve Inference Choice