

Homework - Year 2

Given: 13.10.25

Due: 20.10.25



Maths Name: _____

Arithmetic:

$8 - 3 = \square$

$7 - 5 = \square$

$9 - 8 = \square$

$8 - 6 = \square$

$10 - 4 = \square$

$11 - 9 = \square$

$20 - 15 = \square$

$12 - 7 = \square$


This week's learning:

Is the statement always true, sometimes true or never true?

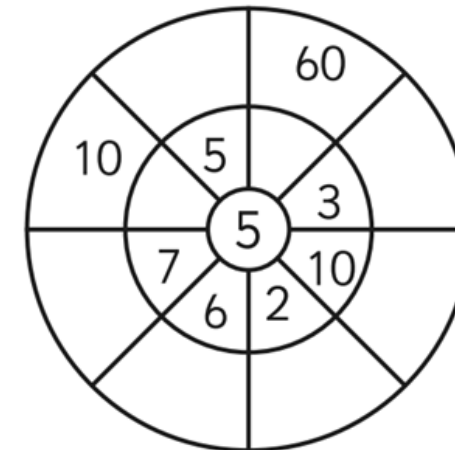
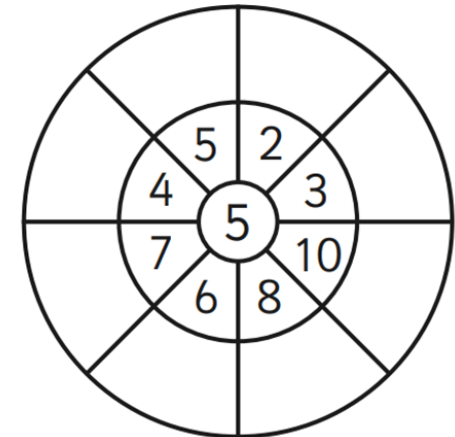
When counting in 2s, all the numbers are even.

How do you know?

Complete the number tracks.



Practise makes perfect:



Homework - Year 2

Given: 13.10.25

Due: 20.10.25



English Name: _____

SPAG:

Add the suffix '-ing' to this word:

kiss



Find the hidden words in this mini word search.

n y b i h
c o m e o
p u l l u
o n c e s
u w e r e

come you were once house pull

Where did Biscuit live?

Find and copy two adjectives that describe what Pumpkin looks like?

1. _____

2. _____

How do you think Pumpkin felt when Biscuit offered to play with him?

Number the sentences from 1-3 to show the order they appear in the text.

"Do you want to play with me?"
He loved eating yummy bones.
The cat was crying.



Biscuit's New Friend

Once there lived a dog called Biscuit. He lived in a house by a stream. He loved eating yummy bones. His favourite thing to do was go for walks. One day, he spotted a ginger shape by the stream. He trotted over to the stream and saw it was a little, furry cat. The cat was crying.

"Are you ok?" Biscuit asked.

"I am lonely and don't have any friends," said the cat.

"Do you want to play with me?" asked Biscuit.

"Oh, yes please. My name is Pumpkin," said the cat shyly.

Biscuit and Pumpkin became best friends and they played together every day.



Our Reading Comprehension Skills: Explain Retrieve Inference Choice